



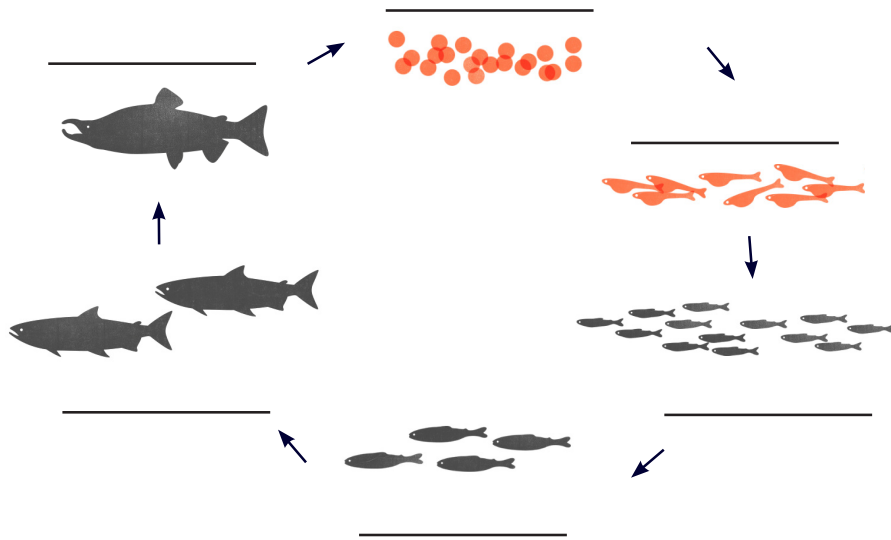
SHOW US WHAT YOU KNOW

This is not a test! Just do your best.

First Name: _____

School: _____ Date: _____

1. What are the life stages of salmon?



2. Fill in the blanks: "Salmon need water is that is c _____, c _____, and c _____!"

3. What is a salmon's nest called? _____


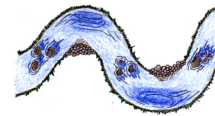
4. Fill in the blanks below with a macro-invertebrate group number (1, 2, or 3):

- Group ____ bugs can live in clean or somewhat polluted water.
- Group ____ bugs can live only in very clean water.
- Group ____ bugs can survive even in very polluted water.

5. Write an example of a native plant:

6. Name two things that trees and shrubs hanging over the side of the stream provide for salmon:

7. What shape is a healthy salmon stream? (Circle one):



8. Name 3 things we can measure about water quality.

a. _____

b. _____

c. _____

9. Describe two things you will do to help protect salmon streams:

10. Why are Pacific NW salmon important?
